

# ANIMAL SUMS

Can you find out which number does each of the animals stand for?  
Write it in the box at the bottom.






$$\text{Crocodile} + \text{Crocodile} = 10$$

$$6 - \text{Bear} = \text{Crocodile}$$

$$\text{Crocodile} + \text{Snake} = 9$$

$$\text{Bear} + \text{Dolphin} = \text{Snake}$$

$$6 + \text{Dolphin} = \text{Monkey}$$

 = <input type="text"/>	 = <input type="text"/>	 = <input type="text"/>
 = <input type="text"/>	 = <input type="text"/>	